



Solve Problems

Involving

Converting Time

What is 513 minutes in hours and minutes?



Reveal Answer




What is 513 minutes in hours and minutes?

8 hours and 33 minutes

Next Question

What is 3 hours and 14 minutes in minutes alone?



Reveal Answer




What is 3 hours and 14 minutes in minutes alone?

194 minutes

Next Question

How many seconds are there in 5 minutes and 37 seconds?



Reveal Answer




How many seconds are there in 5 minutes and 37 seconds?

337 seconds

Next Question

Rewrite three hundred and eighty-six minutes in hours and minutes.



Reveal Answer



Rewrite three hundred and eighty-six minutes in hours and minutes.

6 hours and 26 minutes

Next Question

How many years and months are there in 65 months?



Reveal Answer

The background of the slide is a repeating pattern of colorful analog clocks. The clocks are in various colors including green, blue, orange, and purple, and are scattered across the entire page. Each clock face shows a different time.

How many years and months are there in 65 months?

5 years and 5 months

Next Question

What is seven years and eleven months in months alone?



Reveal Answer



What is seven years and eleven months in months alone?

95 months

Next Question

Convert 86 days into weeks and days.



Reveal Answer



Convert 86 days into weeks and days.


12 weeks and 2 days

Next Question

How many days are there in 18 weeks and 5 days?



Reveal Answer

The background of the slide is a repeating pattern of colorful analog clocks. Each clock face is white with black numbers and hands, and is surrounded by a colored border in shades of green, blue, orange, and purple. The clocks are scattered across the entire page.

How many days are there in 18 weeks and 5 days?

131 days

Next Question

Isabella swims 4 lengths of a swimming pool. Her target is to swim the lengths in under 5 minutes. It takes her 319 seconds. Explain why Isabella did not achieve her target.



Reveal Answer

Isabella swims 4 lengths of a swimming pool. Her target is to swim the lengths in under 5 minutes. It takes her 319 seconds. Explain why Isabella did not achieve her target.

319 seconds is more than 300 seconds (5 minutes).

Next Question

A child's school year has 38 weeks of 5 days. In a non-leap year, how many days does each child not have to go to school?




Reveal Answer

A child's school year has 38 weeks of 5 days. In a non-leap year, how many days does each child not have to go to school?

175 days

Next Question

A year 6 class has 5 maths lessons during the week. Each lesson lasts 1 hour and 15 minutes. How many hours and minutes will they have maths lessons in a seven-week half term?



Reveal Answer

A year 6 class has 5 maths lessons during the week. Each lesson lasts 1 hour and 15 minutes. How many hours and minutes will they have maths lessons in a seven-week half term?

43 hours and 45 minutes

Next Question

Aisha is 10 years and 5 months old. Her brother Amit is 6 years and 11 months old. How much older is Aisha in years and months?



Reveal Answer

Aisha is 10 years and 5 months old. Her brother Amit is 6 years and 11 months old. How much older is Aisha in years and months?

3 years and 6 months

Next Question

Daniella saves 10p a day. Her target is to save £4.50. How many weeks and days will it take?



Reveal Answer

Daniella saves 10p a day. Her target is to save £4.50. How many weeks and days will it take?

6 weeks and 3 days

Next Question

A family has lived in a house for 12 years and 7 months. They want to have a party to celebrate 20 years of living in the house. How many months will they have to wait until the party?



Reveal Answer

A family has lived in a house for 12 years and 7 months. They want to have a party to celebrate 20 years of living in the house. How many months will they have to wait until the party?

89 months

Next Question

